



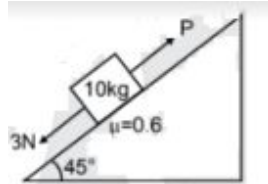
DATE:

PHYSICS

CLASS: 12th

JEE - 2019

1. A block of mass 10 kg is kept on a rough inclined ash shown in figure. The coefficient of friction between the block and the surface is 0.6. Two forces of magnitudes 3N & P Newton are acting of the block as shown figure. If friction on the block is acting upwards then minimum value of P for which the block remains at rest is :



(1) 64 N

(2) 32 N

(3) 12 N

(4) 3 N

Answer:

(2)

Solution:

Upward force = Downward force

$$mg \sin \theta + 3 = p + 1$$

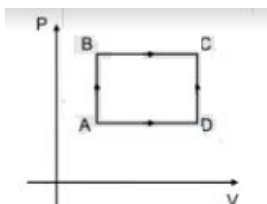
$$mg \sin \theta + 3 = P + \mu(N)$$

substituting

$$\frac{10 \times 10}{\sqrt{2}} + 3 = P + \frac{0.6 \times 10 \times 10}{\sqrt{2}}$$

Simplifying P = 32N

2.



For path ABC, Heat given to the system is 60 J and work done by the system is 30 J.

For path ADC, work done by the system is 10J. The heat given to the system for path ADC is

(1) 100 J

(2) 80 J

(3) 40 J

(4) 60 J

DATE:

PHYSICS

CLASS: 12th

JEE - 2019

Answer:

(3)

Solution:

Change in Int energy should be same

In process ADC

$$\Delta U = 60 - 30 = 30$$

In process ABC

$$\Delta Q = \Delta U + \Delta w$$

$$= 30 + 10$$

$$= 40 \text{ J}$$

3.



Initially an object is kept at a distance of 10 cm from the convex lens and a sharp image is formed at 10 cm ahead of lens on the screen. Now a glass plate of $\mu = 1.5$ and thickness 1.5 cm is placed between object and lens. The distance by which the screen be shifted to get sharp image on the screen will be

(1) $\frac{9}{5} \text{ cm}$

(2) $\frac{5}{9} \text{ cm}$

(3) 1 cm

(4) 5 cm

Answer:

(2)



DATE:

PHYSICS

CLASS: 12th

JEE - 2019

Solution:

$$g = u = 2f \Rightarrow f = 5\text{cm}$$

$$s = t \left(1 - \frac{1}{\mu} \right) = 1.5 \left(1 - \frac{1}{3/2} \right) = 5$$

S is positive \Rightarrow along incident ray

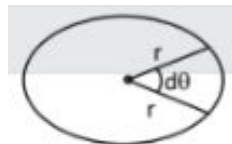
$$U' = 9.5\text{cm} \quad g = ? \quad f = 5\text{cm}$$

$$\frac{1}{g} = \frac{1}{f} + \frac{1}{u}$$

$$\Rightarrow g' = \frac{Uf}{U+f} = \frac{-(9.5)(5)}{-9.5+5} = \frac{47.5}{4.5}$$

$$\text{Shift} = g' - g = 5/9$$

4. A planet of mass m having angular momentum L is revolving around the sun. The aerial velocity for the planet will be



(1) $\frac{L}{m}$

(2) $\frac{L}{2m}$

(3) $\frac{2L}{m}$

(4) $\frac{L}{4m}$

Answer:

(2)

Solution:

$$\text{For small } d\theta \quad dA = \frac{1}{2} r^2 d\theta$$



DATE:

PHYSICS

CLASS: 12th

JEE - 2019

$$\frac{dA}{dt} = \frac{1}{2} r^2 \frac{d\theta}{dt} = \frac{1}{2} r^2 \omega = \frac{L}{2m} = \{Q L = mr^2 \omega\}$$

5. The velocity of a particle \vec{v} at any instant is $\vec{v} = y\hat{i} + x\hat{j}$. The equation of trajectory of the particle is:

(1) $x^2 + y^2 = \text{constant}$

(2) $y^2 = x^2 + \text{constant}$

(3) $xy = \text{constant}$

(4) None of these

Answer:

(2)

Solution:

$$\vec{v} = y\hat{i} + x\hat{j}$$

$$\frac{dx}{dt} = y \quad xdx = ydy$$

$$\frac{dy}{dt} = x \quad \frac{x^2}{2} + \frac{y^2}{2} = C$$

$$x^2 - y^2 = K$$

6. Initially block of mass M is at rest on a frictionless floor and the spring is in relaxed condition A constant force is applied on the block as shown in figure. The maximum velocity of block is :

(1) $\frac{F}{\sqrt{mK}}$

(2) $\frac{2F}{\sqrt{mK}}$

(3) $\frac{F}{2\sqrt{mK}}$

(4) $\frac{F}{\sqrt{2mK}}$

Answer:

(1)

Solution:

$$v_{\max} = Aw$$

$$= \frac{F}{K} \sqrt{\frac{K}{m}}$$



DATE:

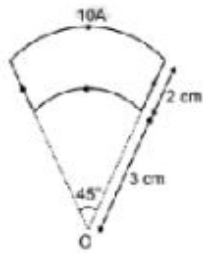
PHYSICS

CLASS: 12th

JEE - 2019

$$= \sqrt{\frac{F}{Km}}$$

7. Magnetic field at point O is



(1) 1.5×10^{-5}

(2) 10^{-5}

(3) 2×10^{-5}

(4) 10^{-4}

Answer:

(2)

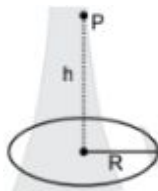
Solution:

$$B_O = B_{AB} + B_{BC} + B_{CD} + B_{OA}$$

$$= 0 + \frac{\mu_0 I \theta}{4\pi r_{BC}} + 0 + \frac{\mu_0 I \theta}{4\pi r_{OA}}$$

Substituting values we get $B_O = 10^{-5}$

8. Charge Q is uniformly distributed over a ring of radius R. The height h, on the axis of the ring at which electric field is maximum



(1) $\frac{R}{\sqrt{2}}$

(2) $\frac{R}{2}$

(3) R

(4) None of these



DATE:

PHYSICS

CLASS: 12th

JEE - 2019

Answer:

(1)

Solution:

$$E \text{ (along) axis of circular coil} = \frac{kQh}{(h^2 + R^2)^{3/2}}$$

$$\text{for max value of } E \frac{dE}{dh} = 0$$

Differentiating E w.r.t.h and equating it to 0

$$\text{we get } h = \frac{\pm R}{\sqrt{2}}$$

9. Two radioactive elements A & B have initially activity 10 curie & 20 curie respectively. If A has twice the no. of moles as that of B. The decay constant λ_A & λ_B can be

(a) (10, 5)

(b) (5, 20)

(c) (20, 10)

(d) (50, 100)

Answer:

(2)

Solution:

$$\text{Conceptual; } \lambda N = A \quad \frac{\lambda_A N_A}{\lambda_B N_B} = \frac{A_A}{A_B}$$

$$N_A/N_B = 2 \quad \Rightarrow \quad \lambda_A/\lambda_B = \lambda/4$$

10. A conducting loop of resistance 10Ω and area $3.5 \times 10^{-3} \text{ m}^2$ is placed in uniform and time varying magnetic field $B = 0.4 \sin(50\pi t)$. The Charge passing through the loop in $t = 0$ to $t = 10 \text{ ms}$ is :

(1) $140 \mu\text{C}$ (2) $70 \mu\text{C}$ (3) $280 \mu\text{C}$ (4) $100 \mu\text{C}$



DATE:

PHYSICS

CLASS: 12th

JEE - 2019

Answer:

(1)

Solution:

$$Q = \frac{\Delta\phi}{R}$$

$$\varepsilon = \frac{d\phi}{dt}$$

$$iR = \frac{d\phi}{dt}$$

$$\frac{dQ}{dt} R = \frac{d\phi}{dt}$$

$$\int dQ = \int R d\phi$$

$$Q = \frac{1}{R} \int dQ$$

$$= \frac{1}{R} A \int_0^{10\text{ms}} B dt$$

$$= \frac{1}{R} 3.5 \times 10^{-3} \int_0^{10\text{ms}} 0.4 \sin(50\pi t) dt$$

$$= 140 \mu\text{c}$$

11. If current in a current carrying wire is 1.5A, number of free electrons per unit volume is $8 \times 10^{28} m^{-3}$ and area of cross section is 5 mm^2 . Drift velocity of electrons will be

(1) 0.2 mm/s

(2) 2 mm/s

(3) 0.2 mm/s

(4) None of these

Answer:

(1)

Solution:

$$i = e n A V_d \text{ (relation between } i \text{ and } v_d)$$



DATE:

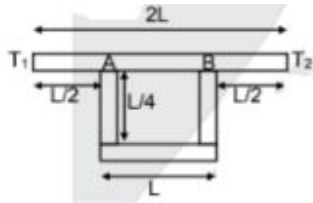
PHYSICS

CLASS: 12th

JEE - 2019

$$V_d = \frac{i}{enA} = \frac{1.5}{1.6 \times 10^{-19} \times 5 \times 10^{-6} \times 8 \times 10^{28}} = 0.02$$

12.



If temperature difference $T_1 - T_2$ is 120°C . The temperature difference between points A & B is

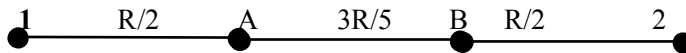
(1) 30

(2) 45

(3) 60

(4) 75

Answer:



(2)

Solution: effective resistance between A and B is

$$\frac{\frac{3R \cdot 1^2}{2}}{3R + 2R} = \frac{3R^2}{5R}$$

effective resistance between 1 and 2 is

$$\frac{R}{2} + \frac{R}{2} + \frac{3R}{5}$$

$$R + \frac{3R}{5} = \frac{8R}{5}$$

$$\frac{T_A - T_B}{3R/5} = \frac{T_1 - T_2}{8R/5}$$

$$T_A - T_B = (120)15 \times \frac{3}{8} = 45^\circ$$

13.

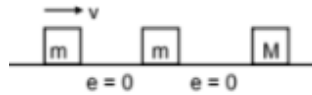


DATE:

PHYSICS

CLASS: 12th

JEE - 2019



Three blocks m , m and M are kept on a frictionless floor as shown in figure. The left most block is given velocity v towards right. All the collisions between the blocks are perfectly inelastic. The loss in kinetic energy after all the collisions is $5/6^{\text{th}}$ of initial kinetic energy. The ratio of M/m will be:

(1) $1/8$ (2) $1/4$ (3) 4 (4) 2 **Answer:**

(3)

Solution:

$$\frac{mu}{2m+M} = V_f \quad K_f = \frac{1}{6} K_1$$

$$\frac{1}{2} \frac{P^2}{2m+M} = \frac{1}{6} \frac{1}{2} \frac{P^2}{m}$$

$$6m = 2m + M = 4m = M$$

14. In mixture 2 mole of He and 1 mole of Ar is present. Find $\frac{(V_{RMS})_{He}}{(V_{RMS})_{Ar}}$ at 300K .

(1) 6.32

(2) 1.58

(3) 3.16

(4) 10

Answer:

(3)

Solution:

$$V_{RMS} \propto \sqrt{m} \quad V_{RMS}^2 \propto \frac{3RT}{M}$$

15. Light of wavelength $\lambda_1 = 340\text{ nm}$ and $\lambda_2 = 540\text{ nm}$ are incident on a metallic surface. If the ratio of the speed of the electrons ejected is 2. The work function of the metal is



DATE:

PHYSICS

CLASS: 12th

JEE - 2019

(1) 1 eV

(2) 1.85 eV

(3) 1.5 eV

(4) 2 eV

Answer:

(2)

Solution:

$$\frac{hc}{\lambda_1} = \phi + \frac{1}{2} m (mv)^2 \quad 1$$

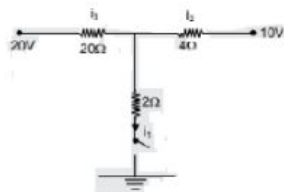
$$\frac{hc}{\lambda_2} = \phi + \frac{1}{2} m V^2 \quad 2$$

sub 2 in 1

$$\frac{hc}{\lambda_1} = \phi + 4 \left(\frac{hc}{\lambda_2} - 4 \right)$$

$$3\phi = 4 \left(\frac{12375}{5400} \right) - \frac{12375}{3400}$$

$$\phi = 1.838 \sim 1.85$$

16. Value of i_1 (Ampere) when switch is closed is.

(1) 2

(2) 5

(3) 10

(4) 1

Answer:

(2)

Solution:

$$\frac{v_0 - 20}{2} = \frac{v - 10}{4} = \frac{v - 0}{2}$$



DATE:

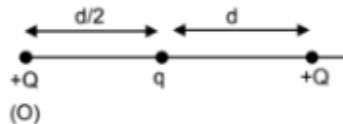
PHYSICS

CLASS: 12th

JEE - 2019

$$\Rightarrow V = 10 \quad i = \frac{10}{2} = 5A$$

17. If net force on charge kept at O is zero. The value of charge q is :



(1) $+\frac{Q}{2}$

(2) $-\frac{Q}{2}$

(3) $+\frac{Q}{4}$

(4) $-\frac{Q}{4}$

Answer:

(4)

Solution:

$$\text{Net force of } q = 0 \Rightarrow \frac{KQq}{(d/2)^2} + \frac{KQq}{d^2} = 0$$

$$\therefore q = -\frac{Q}{4}$$

18. If value of electric field $E = 6.3 \times 10^{27}$ volt / m for a electromagnetic wave. The value of magnetic field B will be:

(1) $5 \times 10^{-19} T$

(2) $2.1 \times 10^{19} T$

(3) $5 \times 10^{-20} T$

(4) $2.1 \times 10^{20} T$

Answer:

(2)

Solution:

$$\frac{E}{B} = C \quad \Rightarrow \quad B = \frac{E}{C}$$



DATE:

PHYSICS

CLASS: 12th

JEE - 2019

19. Two coherent light sources having intensity I_1 and I_2 . If ratio of $\frac{I_{max}}{I_{min}}$ is 6 : 1. Find $\frac{I_1}{I_2}$?

(1) $\frac{16}{9}$

(2) $\frac{9}{16}$

(3) $\frac{4}{1}$

(4) $\frac{25}{9}$

Answer:

(4)

Solution:

$$\frac{I_{max}}{I_{min}} = \frac{(\sqrt{I_1} + \sqrt{I_2})^2}{(\sqrt{I_1} - \sqrt{I_2})^2} \quad \text{simplify we get } \frac{I_1}{I_2} = \frac{25}{9}$$

20. If length of resistance wire is increased by 0.5 % keeping the volume constant then change in resistance will be

(1) 0 %

(2) 1%

(3) 0.5%

(4) 2%

Answer:

(2)

Solution:

$$R = \frac{\rho l \times l}{a \times l} = \frac{\rho l^2}{V}$$

$$R \propto l^2$$

$$100 \times \frac{\Delta R}{R} = 2 \left(\frac{\Delta l}{l} \times 100 \right) \\ = 2(0.5)$$

$$100 \times \frac{\Delta R}{R} = 1\%$$



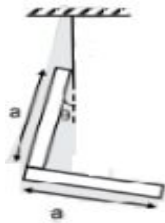
DATE:

PHYSICS

CLASS: 12th

JEE - 2019

21. A uniform L shaped rod each of side A is held as shown in the figure. The angle θ such that rod remain stable will be.



(1) $\tan^{-1}\left(\frac{1}{2}\right)$

(2) $\tan^{-1}\left(\frac{1}{3}\right)$

(3) $\tan^{-1} 2$

(4) $\tan^{-1} 1$

Answer:

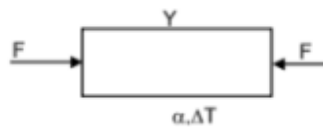
(2)

Solution:

Clockwise torque = anti clockwise torque

$$\theta = \tan^{-1}\left(\frac{1}{3}\right)$$

22. A rod of acted by two equal forces as shown in the figure. The coefficient of thermal expansion of the rod is α and area of cross section is A. When the temperature the rod increased by Δt . The length of the rod does not change. The young's modulus Y will be.



(1) $\frac{F}{2A\alpha\Delta T}$

(2) $\frac{F}{A\alpha\Delta T}$

(3) $\frac{2F}{A\alpha\Delta T}$

(4) $\frac{F}{3A\alpha\Delta T}$

Answer:

(2)

Question:



DATE:

PHYSICS

CLASS: 12th

JEE - 2019

$$C_{eq} = \int_0^a \frac{\epsilon_0 a dx}{\frac{y}{k} + \frac{(d-y)}{1}}$$

Integrating we get option 1

24. In a semiconductor mobility of electron, i.e. drift velocity per unit applied electric field is 1.6 (S.I unit). Density of electron is $10^{19}/m^3$. (Neglect holes concentration). Resistivity of semi conductor is :-

- (1) 0.4 Ωm (2) 2 Ωm (3) 4 Ωm (4) 0.2 Ωm

Answer:

(1)

Solution:

$$\sigma = ne\mu \Rightarrow \rho = \frac{1}{ne\mu}$$

$$\frac{1}{10^{19} \times 1.6 \times 10^{-19} \times 1.6} = 0.4 \Omega m$$

25. A block of mass M is hanging by a string of negligible mass in a car. The speed of wave in the string 60 m/s. Now car is accelerated horizontally by an acceleration a the speed of wave in the string is 60.5 m/s. What is a in terms of g?

- (1) $\frac{g}{5}$ (2) $\frac{g}{10}$ (3) $\frac{g}{\sqrt{30}}$ (4) $\frac{g}{30}$

Answer:

(3)

Solution:



DATE:

PHYSICS

CLASS: 12th

JEE - 2019

$$v = \sqrt{\frac{ma}{M}} \quad V \propto \sqrt{a_{\text{eff}}}$$

$$\frac{\sqrt{g^2 + u^2}}{g} = \left(\frac{60.5}{60} \right)$$

$$\frac{\cancel{g} 1 + \left(\frac{a}{\cancel{g}} \right)^2}{\cancel{g}} = \left(\frac{60.5}{60} \right)$$

$$\left(1 + \frac{1}{2} \frac{a}{g} \right) = \left(\frac{60.5}{60} \right) = \left(\frac{60 + \frac{1}{2}}{60} \right)$$

Simplifying $a = \frac{g}{\sqrt{30}}$

Er. Ajay Kumar
ajayonlinezone@gmail.com
www.ConceptsMadeEasy.com